

## NID MDES MOCK TEST



NAME:-

BATCH:-

DATE:-

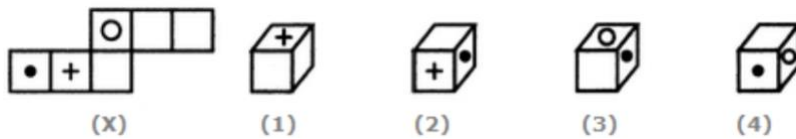
***INSTRUCTIONS:-***

***Number of questions:- 32***

***Directions: Question No.1 to 28 carries 1.0 mark.***

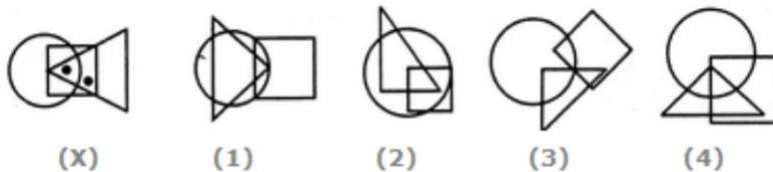
***Directions: Question No. 29 to 32 carries 3.0 marks each.***

1. Choose the box that is similar to the box formed from the given sheet of paper (X).



- a. 1 only
- b. 1, 2 and 3 only
- c. 2 and 3 only
- d. 1, 2, 3 and 4

2. Select the figure which satisfies the same conditions of placement of the dots as in Figure-X.



- a. 1
- b. 2
- c. 3
- d. 4

3. Choose the alternative which is closely resembles the mirror image of the given combination.

WHITE

(1) WHITE

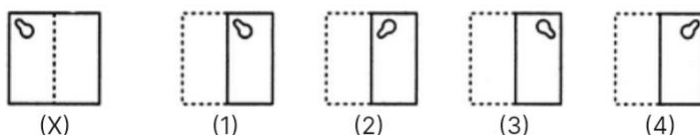
(2) WHITE

(3) WHITE

(4) WHITE

- a. 1
- b. 2
- c. 3
- d. 4

4. Find out from amongst the four alternatives as to how the pattern would appear when the transparent sheet is folded at the dotted line.



- a. 1
- b. 2
- c. 3
- d. 4

5. Which of the following countries is/are not recognized by the United Nations?

- a. Sealand
- b. Christiania
- c. Crimea
- d. All of the these

6. In the following the questions choose the word which best expresses the meaning of the given word.

**DISTINCTION**

- a. Diffusion
- b. Disagreement
- c. Different
- d. Degree

7. Guide is to direct as reduce is to

- a. Decrease
- b. Maintain
- c. Increase
- d. Preserve

Read the following passage and answer the questions.

At this stage of civilisation, when many nations are brought in to close and vital contact for good and evil, it is essential, as never before, that their gross ignorance of one another should be diminished, that they should begin to understand a little of one another's historical experience and resulting mentality. It is the fault of the English to expect the people of other countries to react as they do, to political and international situations. Our genuine goodwill and good intentions are often brought to nothing, because we expect other people to be like us. This would be corrected if we knew the history, not necessarily in detail but in broad outlines, of the social and political conditions which have given to each nation its present character.

8. According to the author of 'Mentality' of a nation is mainly product of its

- a. History
  - b. International position
  - c. Politics
  - d. Present character
9. The need for a greater understanding between nations

- a. Was always there
- b. Is no longer there
- c. Is more today than ever before
- d. Will always be there

10. The character of a nation is the result of its

- a. Mentality
- b. Cultural heritage
- c. Gross ignorance
- d. Socio-political conditions

11. According to the author his countrymen should

- a. Read the story of other nations
- b. Have a better understanding of other nations
- c. Not react to other actions
- d. Have vital contacts with other nations

12. Englishmen like others to react to political situations like

- a. Us
- b. Themselves
- c. Others
- d. Each others

13. Identify the given dance form.



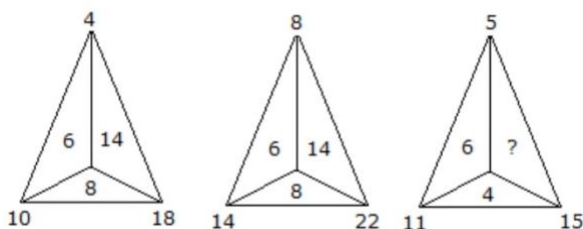
- a. Yakshagana

- b. Kolannalu
- c. Manipuri Raas Leela
- d. Andhra Natyam

14. Radha moves towards South-East a distance of 7 km, then she moves towards West and travels a distance of 14 km. From here she moves towards North-West a distance of 7 km and finally she moves a distance of 4 km towards east. How far is she now from the starting point?

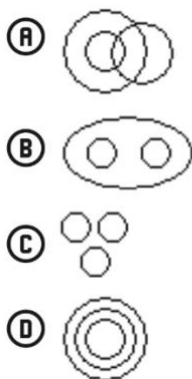
- a. 3 km
- b. 4 km
- c. 10 km
- d. 11 km

15. Which one will replace the question mark ?



- a. 6
- b. 10
- c. 17
- d. 15

16. Which of the following diagrams indicates the best relation between Football, Player and Field ?



17. Detergents used for cleaning clothes and utensils contain?

- a. Bicarbonates
- b. Bismuthates

c. Sulphonates

d. Nitrates

18. Which city is called 'White City' of Rajasthan?

a. Bihar

b. Jaipur

c. Udaipur

d. Jodhpur

19. When a plot is sold for Rs. 18,700, the owner loses 15%. At what price must that plot be sold in order to gain 15%?

a. Rs. 21,000

b. Rs. 22,500

c. Rs. 25,300

d. Rs. 25,800

20. Find out which of the figures (1), (2), (3) and (4) can be formed from the pieces given in figure (X).



a. 1

b. 2

c. 3

d. 4

21. QAR, RAS, SAT, TAU, \_\_\_\_\_

a. UAV

b. UAT

c. TAS

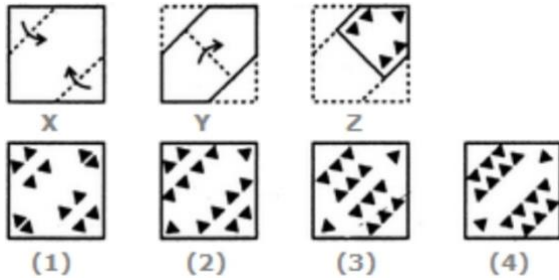
d. TAT

22. Here are some words translated from an artificial language.

Moolokarn means blue sky

Wilkospadi means bicycle race

Moolowilko means blue bicycle



Which word could mean “racecar”?

- a. Wilkozwet
- b. Spadiwilko
- c. Moolobreil
- d. Spadivolo

23. Who inaugurated the ‘Unmesha’ International Literature Festival and the ‘Utkarsh’ Festival of Folk and Tribal Performing Arts in Bhopal, Madhya Pradesh?

- a. Prime Minister of India
- b. President of India
- c. Chief Minister of Madhya Pradesh
- d. Minister of Culture and Arts

24. Choose a figure which would most closely resemble the unfolded form of Figure (Z).

- a. 1
- b. 2
- c. 3
- d. 4

25. God is .....

- a. Graceful
- b. Gracious
- c. Grateful
- d. Greatful

26. Do you know .....

- a. Where she comes from

b. Where does she come from

c. Where from she comes

d. From where does she come

27. Find the number of triangles in the given figure.



a. 7

b. 6

c. 4

d. 5

28. What is the name of the tallest tree in the world?

a. Hyperion

b. Centurion

c. Doerner Fir

d. Sequoia

29. What is the name of the landing site of Chandrayaan-3's moon lander, as revealed by Prime Minister Narendra Modi during his visit to the ISRO Telemetry, Tracking and Command Network Mission Control Complex?

a. Chandrababha Landing Site

b. Shiv Shakti Point

c. Lunar Harmony Spot

d. ISRO Lunar Nexus

30. Identify the figure that completes the pattern.



(X)



(1)



(2)



(3)



(4)

a. 1

b. 2

c. 3

d. 4



31. Choose the word which is different from the rest.

- a. Rigveda
- b. Yajurveda
- c. Atharvaveda
- d. Ayurveda

32. Ayush was born two years after his father's marriage. His mother is five years younger than his father but 20 years older than Ayush who is 10 years old. At what age did the father get married ?

- a. 23 years
- b. 25 years
- c. 33 years
- d. 35 years